

# Daily Planner

Today is Friday the 22nd of October



English: Spelling test

Crunch & Sip + Fitness Grid



English: Library

Recess



Mathematics: Division/Grouping

Lunch




Geography

# Spelling Test

1. Ask a family member to test you on your spelling words or record yourself saying the words and play them back while you write them down.
1. Check your words carefully and tick the ones that are correct.
1. Look at the words you got wrong. Circle the part that was incorrect. Rewrite the word three times.
1. Retest yourself on the words you got wrong.




Listen to this story , 'Mr McGee goes to sea', read by Mrs O'Donnell.



# Library

After watching, circle the correct answers in the worksheet below :



What did Mr McGee's chair become?

- a. House
- b. Boat
- c. Sea

What type of tree was Mr McGee sitting under?

- a. Apple
- b. Pear
- c. Orange

What was Mr McGee drinking?

- a. Tea
- b. Water
- c. Milk

What word rhymes with inside?

- a. Down
- b. Fly
- c. Wide

What was Mr McGee swallowed by?

- a. Dolphin
- b. Octopus
- c. whale

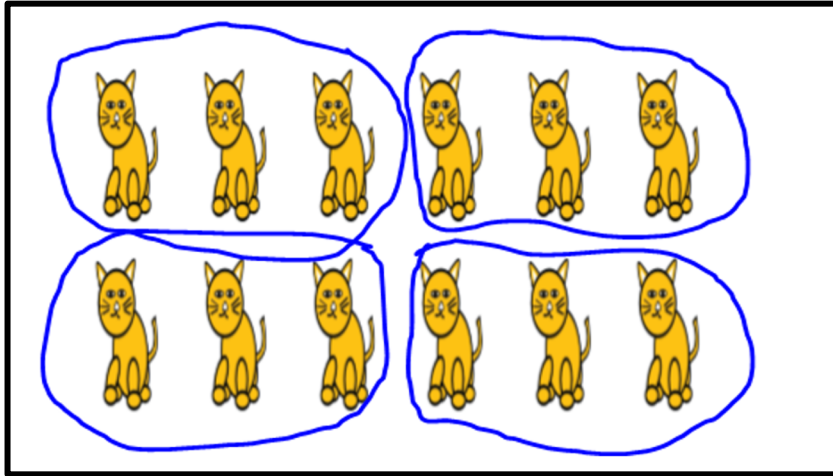
What word rhymes with about?

- a. Day
- b. Out
- c. Boat

# Mathematics

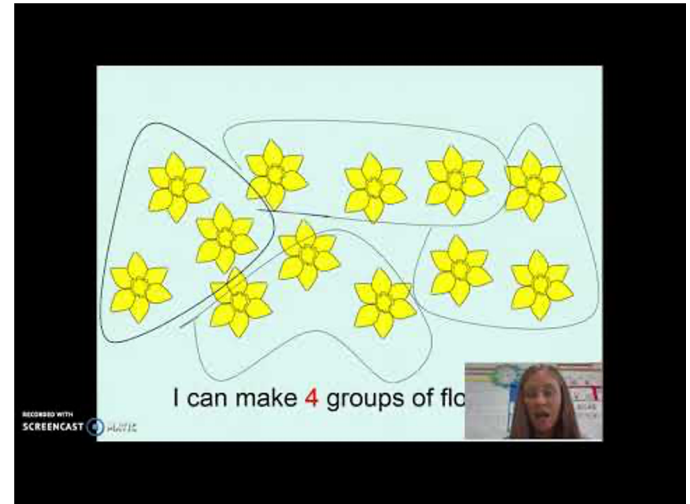
We are learning to (WALT): understand the concept of grouping in division.

Sometimes we know how many things we want in a group,  
but we don't know how many groups we can make.






12 cats , 3 cats in each group.  
How many groups? Answer: 4 groups.

Watch this video



<https://www.youtube.com/embed/q3Wzkh4W86Y>



15 dogs, make groups of 5.  
How many groups ?

10 chickens, make groups of 2.  
How many groups ?

25 fish, make groups of 5.  
How many groups ?

Each monkey needs 5 bananas. You have 25 bananas. How many monkeys can you feed?



Each bear needs 6 fish. You have 24 fish. How many bears can you feed?



Each bird needs 3 worms. You have 18 worms. How many birds can you feed?



**Extension:** You've shared 48 cupcakes equally with your friends. Each friend has got 6 cupcakes. How many friends did you share the cupcakes with?

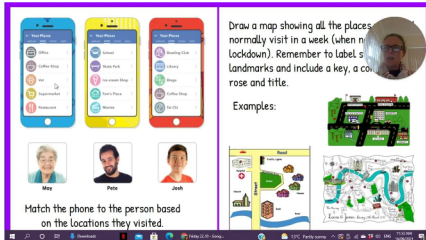
# Geography

**We Are Learning To (WALT):** understand that people visit places for different reasons.


People go to places for lots of different reasons. The place that children go to most frequently is school. Think about the different ways that children get to school. How do you get to school?

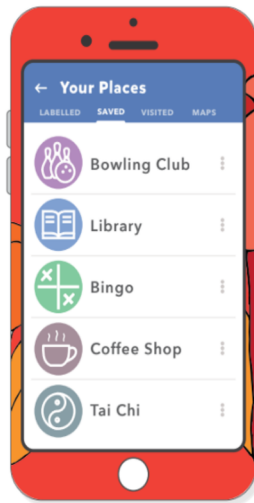
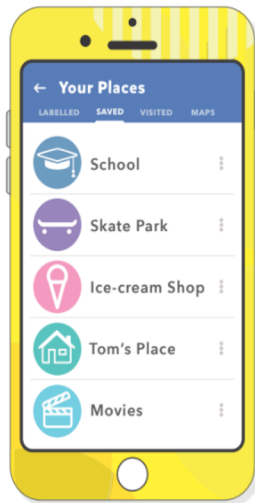
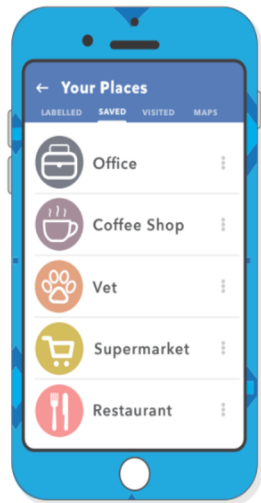
Apart from school, most children will go to other places near to where they live.

Use Google Earth to find our school and other places near your home that you go to. E.g swimming pool, dance lessons, sport training, shops, train station.



<https://earth.google.com/web/>





Draw a map showing all the places you would normally visit in a week (when not in lockdown). Remember to label streets, landmarks and include a key, a compass rose and title.

Examples:



May



Pete



Josh

Match the phone to the person based on the locations they visited.

